

Şekil Sayı Eşleştirme

→
= 5

☆
= 6

×
= 4

⬠
= 3

□
= 0

△
= 1

▽
= 7

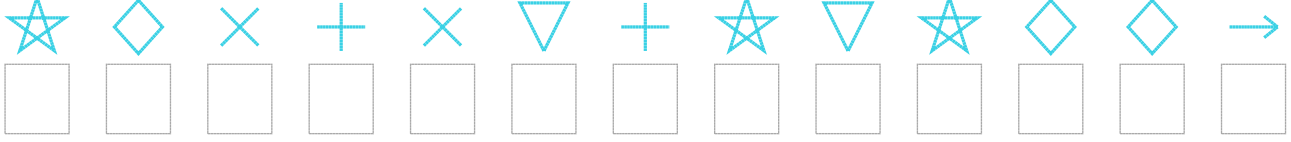
○
= 9

+

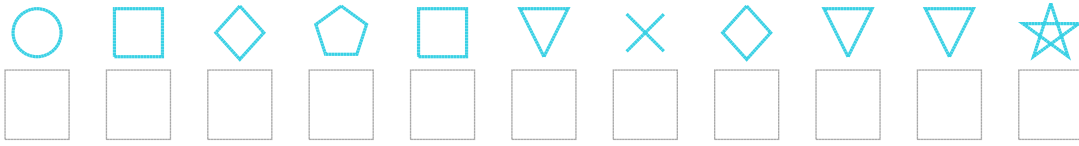
◇
= 8

Aşağıdaki uzun şifreleri hatasız çözerek altlarına yazın:

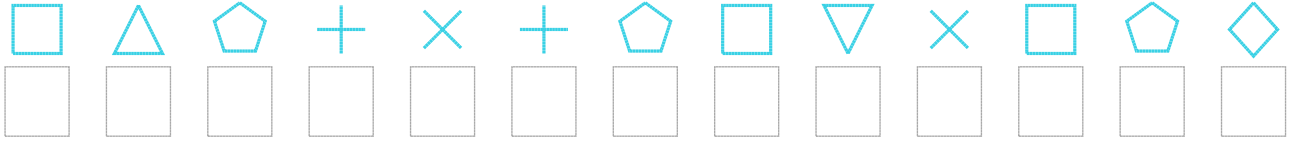
1. Şifre



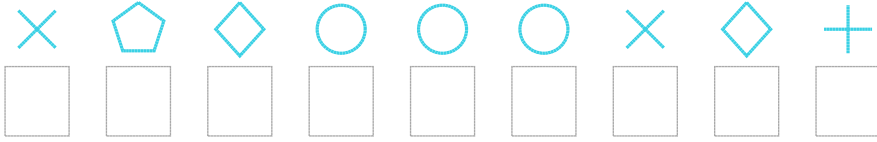
2. Şifre



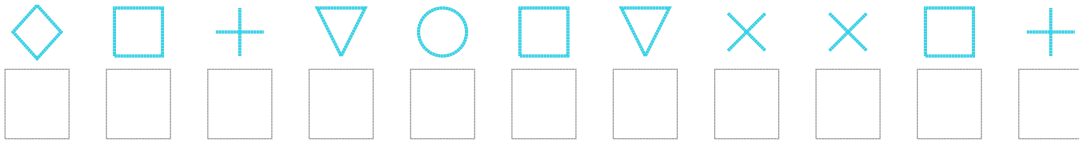
3. Şifre



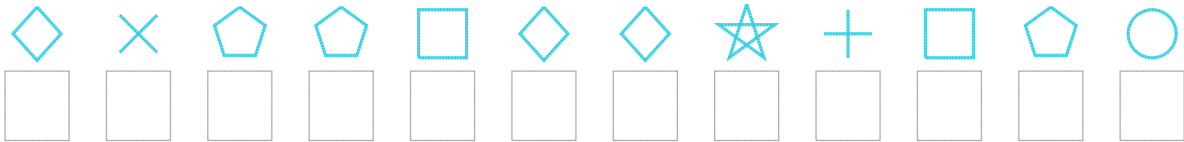
4. Şifre



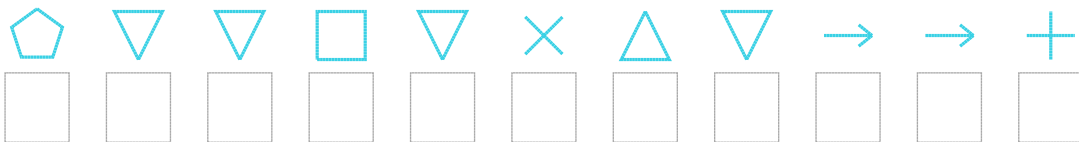
5. Şifre



6. Şifre



7. Şifre



□ BONUS: 2. ve 6. şifrenin üçüncü rakamının toplamı kaçtır?

Cevap Anahtarı

1. Şifre: 6842472676885

2. Şifre: 90830748776

3. Şifre: 0132423074038

4. Şifre: 438999482

5. Şifre: 80279074402

6. Şifre: 843308862039

7. Şifre: 37707417552

□ Bonus Soru Cevabı: 11